

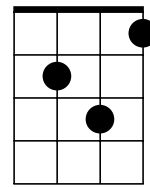
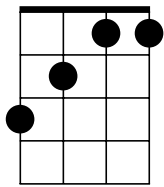
Ukulele Quiz: Chord Tones (3 minutes, v. 4)

© James Hill

www.ukuleleintheclassroom.com

1) Name the chord. 2) Write and name each note in the chord.

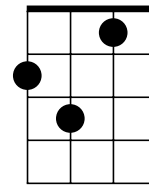
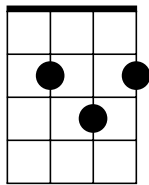
B \flat



1.

2.

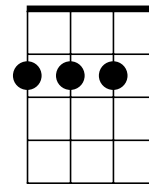
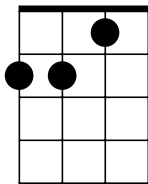
Musical staff with treble clef. Notes: \flat B, D, F, \flat B. Below the staff are four blank lines for writing notes and names.



3.

4.

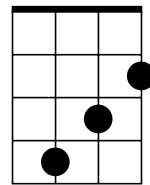
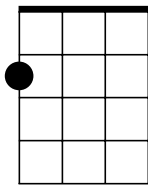
Musical staff with treble clef. Below the staff are four blank lines for writing notes and names.



5.

6.

Musical staff with treble clef. Below the staff are four blank lines for writing notes and names.



7.

8.

Musical staff with treble clef. Below the staff are four blank lines for writing notes and names.